

AP Chem Unit 9 - Wkst. Review I

Target 1: I can write the equilibrium expression for a balanced chemical equation.

Equilibrium: a state in which there are no observable changes as time goes by

Physical Equilibrium: an equilibrium in which only physical properties change




Chemical Equilibrium: a reversible chemical reaction in which the rate of the forward reaction equals the rate of the reverse reaction



There *IS* a relationship between chemical kinetics (ch. 14) and equilibrium (ch. 15).

Consider the following reaction . . .



Assume that the above reaction occurs via a mechanism consisting of a single elementary step. The rate at which AB_2 is produced is the same as the rate at which AB_2 is consumed.

$$\text{rate}_{\text{forward}} = k_f [\text{A}][\text{B}]^2 \quad \text{and} \quad \text{rate}_{\text{reverse}} = k_r [\text{AB}_2]$$

at equilibrium . . .

③ $\text{Rate}_{\text{forward}} = \text{Rate}_{\text{reverse}}$

$$K_c = \frac{[\text{AB}_2]}{[\text{A}][\text{B}]^2}$$

Note: Because rate constants are temperature dependent, it follows that equilibrium constants are also temperature dependent.

The **Law of Mass Action** is an equation for a chemical equilibrium which shows the relationship between the concentrations of reactants and products. An equilibrium-constant expression (or simply an equilibrium expression) can be written for equilibria as follows:

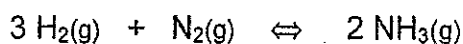


④ $K_c = \frac{[\text{C}]^c [\text{D}]^d}{[\text{A}]^a [\text{B}]^b}$

[] = concentration in molarity
 K_c = equilibrium constant

Note: The concentrations of pure solids and liquids are never included in equilibrium expressions!

Example: Write the equilibrium constant expression for the following reaction:



5

$$K_c = \frac{[\text{NH}_3]^2}{[\text{H}_2]^3 [\text{N}_2]}$$

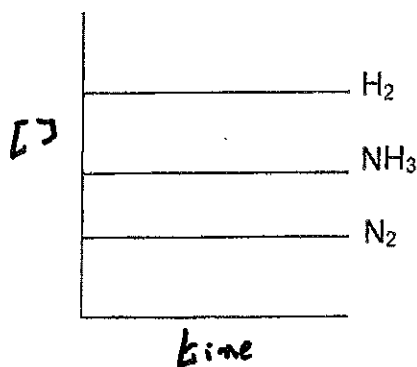
The Haber Process is used to produce ammonia which is a chemical used in fertilizers. Examine the chart below regarding 3 different experiments which produce ammonia:

Results of Three Experiments for the Reaction $\text{N}_2(\text{g}) + 3\text{H}_2(\text{g}) \rightleftharpoons 2\text{NH}_3(\text{g})$

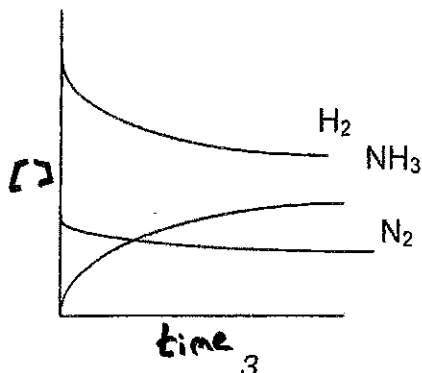
Experiment	Initial Concentrations (M)	Equilibrium Concentrations (M)	$K_c = \frac{[\text{NH}_3]^2}{[\text{H}_2]^3 [\text{N}_2]}$
1	1.000 M N_2 1.000 M H_2 0.000 M NH_3	0.921 M N_2 0.763 M H_2 0.157 M NH_3	$K_c = 6.02 \times 10^{-2} \text{ L}^2 \text{ mol}^{-2}$
2	0.000 M N_2 0.000 M H_2 1.000 M NH_3	0.399 M N_2 1.197 M H_2 0.203 M NH_3	$K_c = 6.02 \times 10^{-2} \text{ L}^2 \text{ mol}^{-2}$
3	2.00 M N_2 1.00 M H_2 3.00 M NH_3	2.59 M N_2 2.77 M H_2 1.82 M NH_3	$K_c = 6.02 \times 10^{-2} \text{ L}^2 \text{ mol}^{-2}$

K_c Doesn't need units

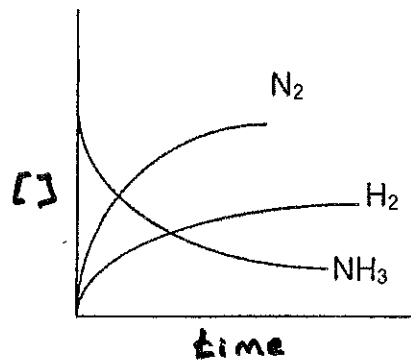
- 6 What conclusions can you make based upon the chart above? *K_c is the same!!*
Equilibrium will be reached if you begin with, Reactant, Product, or Both
- 7 Which of the following graph(s) of concentration vs time seem unlikely for the Haber process?



No, cause H_2 & N_2 would \downarrow with $\uparrow \text{NH}_3$



This is possible



This is possible to if you start w/ NH_3

Target 2: I can numerically evaluate K_c and K_p from a knowledge of the equilibrium concentrations (or pressures) of reactants or products, or from the initial concentrations and the equilibrium concentration of at least one substance.

Target 3: I can interconvert K_c and K_p .

Solving for K_p instead of K_c ! When the reactants and products of a chemical equilibrium are all gases, we can write equilibrium expressions in terms of partial pressures instead of molar concentrations. When the partial pressures are given in atmospheres, we write the equilibrium constant as K_p instead of K_c . The numerical values of K_p and K_c are usually different. There is a way to convert from one constant to another by using the following relationship: *write eqn, define variables*

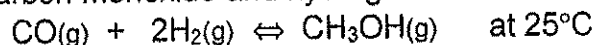
$$K_p = K_c (RT)^{\Delta n}$$

$\Delta n = \text{moles gas products} - \text{moles gas reactants}$
(Balanced eqn!!)

$$R = .0821 \frac{\text{L atm}}{\text{mole K}}$$

$T = \text{temp K}$

Practice problem: Methanol, CH_3OH , is produced commercially by the catalyzed reaction of carbon monoxide and hydrogen:



An equilibrium mixture in a 2.00 liter vessel is found to contain 0.046 mol CH_3OH , 0.170 mol CO , and 0.302 mol H_2 . Calculate the value of K_c and K_p at this temperature.

$$K_c = \frac{[\text{CH}_3\text{OH}]}{[\text{CO}][\text{H}_2]^2} = \frac{[.046/2.00]}{[.170/2.00][.302/2.00]^2} = \frac{[.023]}{[.085][.15]^2} = 12$$

$$K_p = K_c (RT)^n = (12) \left[(.0821)(298) \right]^{-2} = .020$$

$$T = 25^\circ\text{C} = 298\text{K}$$

$$n = 1 - 3 = -2$$

Target 4: I can use the equilibrium constant to calculate equilibrium concentrations.

What does an equilibrium constant tell us? The value of the equilibrium constant depends upon the nature of the reaction and upon temperature. At constant temperature, we find that the magnitude of K varies greatly from one reaction to another. The value of K tells us the relative quantities of reactants and products formed at equilibrium.

If $K \gg 1$, then the equilibrium lies to the right; products are favored.

If $K \ll 1$, then the equilibrium lies to the left; reactants are favored.

Consider the following three examples with varying magnitudes of K_c :

Example 1: $2\text{O}_3\text{(g)} \rightleftharpoons 3\text{O}_2\text{(g)}$ at 2300°C ; $K_c = 2.54 \times 10^{12}$

Since K_c is so large ⁴ there is much more Oxygen than Ozone

The equilibrium mixture will contain very little O_3 .

Example 2: $Cl_2(g) \rightleftharpoons 2Cl(g)$ at $25^\circ C$; $K_c = 1.4 \times 10^{-38}$
At equilibrium, the mixture of gases will contain mostly $Cl_2(g)$.

Example 3: $CO(g) + H_2O(g) \rightleftharpoons H_2(g) + CO_2(g)$ at $830^\circ C$; $K_c = 5.10$
The quantities of reactants and products will be comparable.

Other notes concerning equilibrium constants:

- When the equation for a reversible reaction is written in the opposite direction, the equilibrium constant becomes the reciprocal of the original equilibrium constant.

Ex: The K_c for the reaction $2NO(g) + O_2(g) \rightleftharpoons 2NO_2(g)$ is 5.0×10^{12} . Find the K_c for the reaction $2NO_2(g) \rightleftharpoons 2NO(g) + O_2(g)$.

11

$$K_c' = \frac{1}{K_c} = \frac{1}{5.0 \times 10^{12}} = 2.0 \times 10^{-13}$$

- The value of K also depends upon how the equilibrium is balanced. Therefore, when quoting an equilibrium constant, you not only need to state the temperature, but you must also write the chemical equilibrium!

Ex: The reaction for the production of ammonia can be written in a number of ways:

- $N_2(g) + 3H_2(g) \rightleftharpoons 2NH_3(g)$
- $\frac{1}{2} N_2(g) + \frac{3}{2} H_2(g) \rightleftharpoons NH_3(g)$
- $\frac{1}{3} N_2(g) + H_2(g) \rightleftharpoons \frac{2}{3} NH_3(g)$

Write the equilibrium constant expression (K_c) for each of the above. How are the equilibrium constants related to one another?

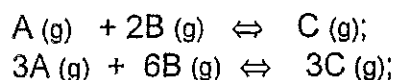
12

(A) $K_c = \frac{[NH_3]^2}{[N_2][H_2]^3}$

(B) $K_c = \frac{[NH_3]}{[N_2]^{1/2}[H_2]^{3/2}}$

(C) $K_c = \frac{[NH_3]^{2/3}}{[N_2]^{1/3}[H_2]}$

ex:



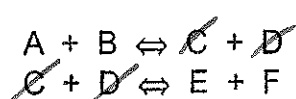
$$K_c = 4$$

$$K'_c = ?$$

$$4^3 = 64$$

Cubic since
3x the 1st eqn

- If a reaction can be expressed as the sum of 2 or more reactions, the equilibrium constant for the overall reaction is given by the product of the equilibrium constants of the individual reactions.



$$K_c = 10^4$$

$$K'_c = 10^3$$



$$K''_c = 10^4 \times 10^3 = 10^7$$

Heterogeneous Equilibria


HETEROGENEOUS EQUILIBRIA are those equilibria which contain reactants and/or products which are in different phases. *Homogeneous equilibria* would be equilibria in which all reactants and products are in the same phase.

Heterogeneous equilibrium:
Different states



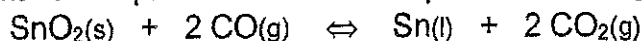
examples

Homogeneous equilibrium:
Same states



If a pure solid or liquid is involved in an equilibrium, its concentration is not included in the equilibrium constant expression! Even though they do not appear in the equilibrium expression, the pure solids and liquids participating in the reaction must be present for an equilibrium to be established.

ex: Write the equilibrium constant expressions for K_c and K_p for the following reaction . .



$$K_c = \frac{[\text{CO}_2]^2}{[\text{CO}]^2}$$

$$K_p = \frac{P_{\text{CO}_2}^2}{P_{\text{CO}}^2}$$

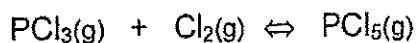
Solving Equilibrium Problems . . . Let the fun begin!

When solving equilibrium problems, you are usually asked to solve for the equilibrium constant or the concentration (or partial pressure for K_p problems) of a reactant or product. In some problems you will be asked to solve for the equilibrium concentration(s), and in other problems you will be asked to solve for initial

concentration(s). Let's work through some examples. **NOTE:** We will not have time to work very many problems in class. Therefore, it is imperative that you take time outside of class to do your problem sets and any additional assigned problems.

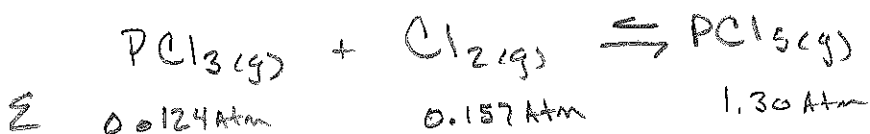
1. Solving for K when given equilibrium conditions:

Phosphorus trichloride gas and chlorine gas react to form phosphorus pentachloride gas:



A gas vessel is charged with a mixture of $\text{PCl}_3(\text{g})$ and $\text{Cl}_2(\text{g})$, which is allowed to equilibrate at 450 K. At equilibrium the partial pressures are $P_{\text{PCl}_3} = 0.124 \text{ atm}$, $P_{\text{Cl}_2} = 0.157 \text{ atm}$, and $P_{\text{PCl}_5} = 1.30 \text{ atm}$. What is the value of K_p at this temperature? Does the equilibrium favor the reactants or products?

(17)



$$K_p = \frac{[\text{PCl}_5]}{[\text{PCl}_3][\text{Cl}_2]} = \frac{1.30}{[0.124][0.157]} = 66.8$$

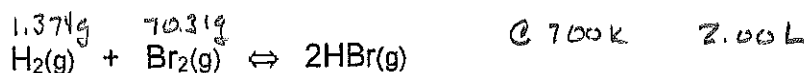
Since $K_p > 1$ The product is favored

2. Solving for K when only one of the equilibrium concentrations is known:

Strategy:

- 1) Tabulate the known initial and equilibrium concentrations of all species.
- 2) For any (and all) species that you know both its initial and equilibrium concentrations, calculate its change in concentration.
- 3) Use the balanced equation to find the changes in concentrations for all other species in the equilibrium.
- 4) Find the equilibrium concentrations of all species through their changes in concentrations . . . now plug in and solve for K!

A mixture of 1.374 g of H_2 and 70.31 g of Br_2 is heated in a 2.00-liter vessel at 700 K. These substances react as follows:



At equilibrium the vessel is found to contain 0.566 g of H_2 . Calculate the equilibrium concentrations of the H_2 , Br_2 , and the HBr . Calculate K_c .

$$18) [H_2]_i = \left(\frac{1.374g}{1} \right) \left(\frac{1 \text{ mole } H_2}{2.016g} \right) \left(\frac{1}{2.00L} \right) = .341 M H_2$$

$$[Br_2]_i = \left(\frac{70.31g}{1} \right) \left(\frac{1 \text{ mole } Br_2}{159.80} \right) \left(\frac{1}{2.00L} \right) = .220 M Br_2$$

	$H_2(g)$	$Br_2(g)$	$\rightleftharpoons 2HBr$
I	.341	.220	0
C	-X (.201)	-X (.201)	+2X +2(.201)
Equil	.140	.019	.402

$$K_c = \frac{[HBr]^2}{[H_2][Br_2]} = \frac{[.402]^2}{[.140][.019]}$$

$$[H_2]_e = \left(\frac{.566g}{1} \right) \left(\frac{1 \text{ mole } H_2}{2.016g} \right) \left(\frac{1}{2.00L} \right) = .140 M H_2$$

@ Equilibrium

$$K_c = 61$$

$$[H_2]_{\text{change}} = [H_2]_i - [H_2]_e$$

$$= .341 - .140$$

$$= .201$$

This is X

3. Solving for K when only the initial concentrations are given:

Target 5: I can calculate the reaction quotient, Q, and by comparison with the value of K_c or K_p determine whether a reaction is at equilibrium. If it is not at equilibrium, I can predict in which direction it will shift to reach equilibrium.

When given initial concentrations of reactants and products, a reaction will usually shift to the right (forward reaction favored) or shift to the left (reverse reaction favored) until the system reaches equilibrium. If you are only given the initial concentrations (or the initial partial pressures of gases), then you must . . .

- 1- calculate the Q (reaction quotient) for the given conditions in a very similar way that you calculated K . . .



$$Q = \frac{[C]^c [D]^d}{[A]^a [B]^b}$$

Whenever you solve for Q, you are solving for conditions which are NOT at equilibrium!

- 2- Next determine if the system is at equilibrium. If it is not at equilibrium, determine which direction that the equilibrium will shift in order to reach equilibrium.

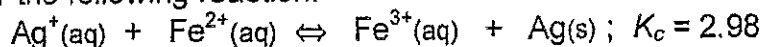
If $Q = K$, then the system is at equilibrium!

If $Q > K$, (\leftarrow) then the equilibrium will shift left (forming more reactants)

If $Q < K$, (\rightarrow) then the equilibrium will shift right (forming more products)

- 3- Finally complete an equilibrium table as described in the previous problem.

example: Consider the following reaction:



The initial concentrations are $[Ag^+] = 0.200$ M, $[Fe^{2+}] = 0.100$ M, and $[Fe^{3+}] = 0.300$ M. What are the ion concentrations when equilibrium is established?

(19)

$$Q = \frac{[Fe^{3+}]}{[Ag^+][Fe^{2+}]} = \frac{[0.300]}{[0.200][0.100]} = 15$$

Since $Q > K_c$ ($K_c < Q$)

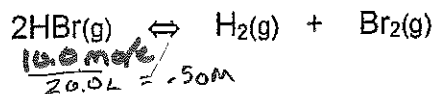
Reaction will shift to
Left forming more Reactants

9 (Larger Q is saying I have to
get much Fe^{3+} . . . shift left
for equilibrium

WARM-UPS! (non-calculator)

Determine Kc

1. Assume 10.0 mol of HBr (g) is placed in a 20.0 liter flask at 300 K. Estimate if 40.0% of the HBr decomposes when equilibrium is reached.



$$(.50 \text{ M})(.400) = .20$$

Attached sheet

2. $\text{N}_2\text{(g)} + \text{O}_2\text{(g)} \rightleftharpoons 2 \text{NO(g)}$; $K_c = 4.00$ @ 500°C

If 6.00 mol of N_2 and 6.00 mol of O_2 are placed in a 2.00-L flask and allowed to reach equilibrium, what is the equilibrium concentration of NO?

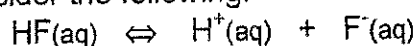
Attached sheet

3. $2 \text{A(aq)} + 3 \text{B(aq)} \rightleftharpoons \text{D(aq)}$; $K_c = 5000$ at 100 K .

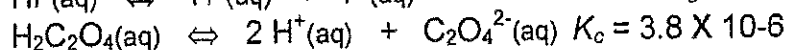
A 3.00-L flask is initially filled with 0.200 M A, 0.100 M B, and 0.200 M D. Calculate the equilibrium concentrations of A, B, & D.

omit

4. Consider the following:



$$K_c = 6.8 \times 10^{-4}$$




$$K_c = 3.8 \times 10^{-6}$$

Determine K for the following reaction:



$$2(\text{HF} \rightleftharpoons \text{H}^+ + \text{F}^-) \Rightarrow K_c^2 = (6.8 \times 10^{-4})^2$$

$$2\text{H}^+ + \text{C}_2\text{O}_4^{2-} \rightleftharpoons \text{H}_2\text{C}_2\text{O}_4 \quad 1/K_c = 1/3.8 \times 10^{-6}$$



Choices:

a) 4.1×10^{-3}

b) 0.12

c) 6.3×10^2


d) 2.8×10^7

Le Chatlier's Principle

Target 6: I can explain how the relative equilibrium quantities of reactants and products are shifted by changes in temperature, pressure or the concentrations of substances in the equilibrium reaction.

$$(6.8 \times 10^{-4})^2 \left(\frac{1}{3.8 \times 10^{-6}} \right)$$

$$= .12$$



	2HBr	\rightarrow	H_2	Br_2	
I	.500M		0	0	
C	-2x		+x	+x	$2x = .200$
	-.200		.100	.100	$x = .100$
Equilibrium	.300		.100	.100	

$$K_c = \frac{[\text{H}_2][\text{Br}_2]}{[\text{HBr}]^2} = \frac{(.100)(.100)}{(.300)^2} =$$

$$K_c = .111$$



$\frac{6.00 \text{ moles}}{2.00\text{L}} \quad \frac{6.00 \text{ moles}}{2.00\text{L}}$

$$K_c = 4$$

	N_2	O_2	\rightarrow	2NO
I	3.00M	3.00M		0
C	-x	-x		2x
Eq	$3.00-x$	$3.00-x$		2x

$$K_c = \frac{[\text{NO}]^2}{[\text{N}_2][\text{O}_2]} = \frac{(2x)^2}{(3.00-x)(3.00-x)} \Rightarrow 4x = 6.00$$

$$x = 1.5$$

$$\sqrt{4} = \frac{(2x)^2}{(3.00-x)^2}$$

$$2 = \frac{2x}{3.00-x}$$

$$6.00 - 2x = 2x$$

$$[\text{N}_2] = 1.5$$

$$[\text{O}_2] = 1.5$$

$$[\text{NO}] = 2(1.5) = 3.0$$

Target 7: I can describe the effect of a catalyst on a system as it approaches equilibrium.

Le Chatlier's Principle: if a chemical system is at equilibrium and is disturbed by a change in temperature, pressure, or concentration of one of the components, the system will shift its equilibrium position so as to counteract the effect of the disturbance.

Changes in reactant or product concentration

↑ Reactant [] shift to products

↑ Product [] shift to reactants

Changes in Pressure or Volume

Increase in Pressure (↓V) will cause a shift to the side with the fewest gas moles

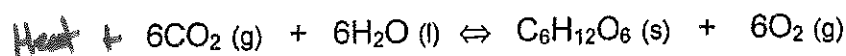
Changes in Temperature

Treat heat as a Reactant (Endo) or Product (exo)
and will shift same as Δ's in reactants + products

Effects of Adding a Catalyst

Adding a catalyst to a rxn has no effect (or shift) +
no effect on K

Practice: For the following reaction, $\Delta H = 2816 \text{ kJ}$



How is the equilibrium yield of $\text{C}_6\text{H}_{12}\text{O}_6$ affected by:

- a) increasing the partial pressure of CO_2 ? Shift to Right (due to more collisions)
- b) increasing the temperature? Shift to Right
- c) removing CO_2 ? Shift to Left
- d) decreasing the total pressure? No effect
6 moles \rightleftharpoons 6 moles
- e) removing part of the $\text{C}_6\text{H}_{12}\text{O}_6$? No effect, $\text{C}_6\text{H}_{12}\text{O}_6$ is a solid
- f) adding a catalyst? No effect